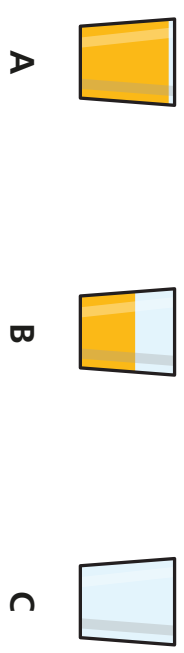



Compare volume

1 Here are three glasses.




- a) Which glass is empty? _____
- b) Which glass is half full? _____
- c) Which glass is full? _____


2 Tommy has some milk in a glass.



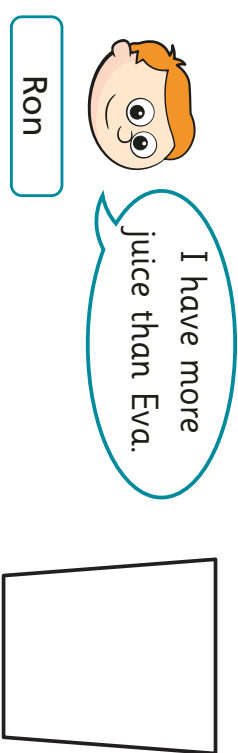
Circle all the glasses that have more milk than Tommy's.



3 Eva, Ron and Amir have some juice.





Shade the glasses to show how much juice Ron and Amir could have.




Compare answers with a partner.



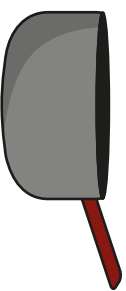
- 4 Which fish tank contains less water?
Tick your answer.



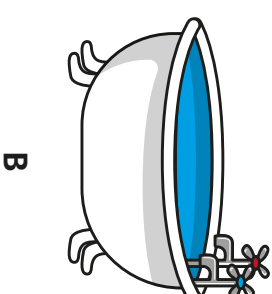
- 5 Tick the object with the greater capacity.



- 6 Tick the object with the greatest capacity.



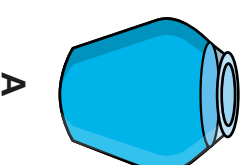
- 7 Put these objects in order of how much water they can hold.
Start with the object that has the smallest capacity.



smallest

greatest

- 8 Whitney says B contains more water than A.



Why might Whitney think this?
What could she do to check?