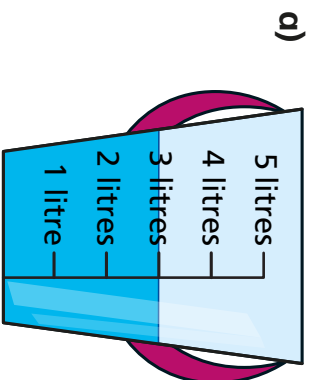
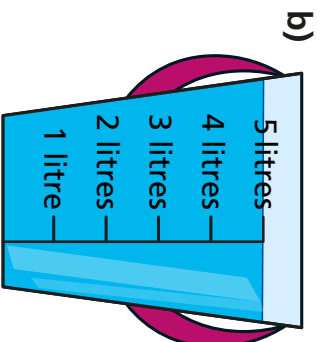
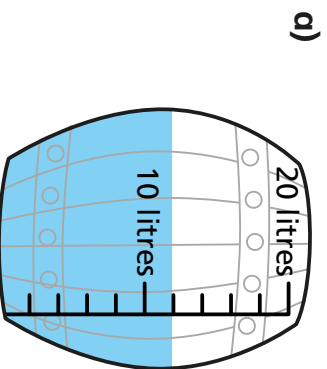
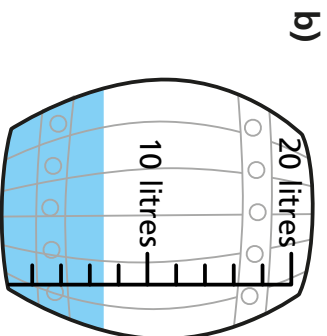


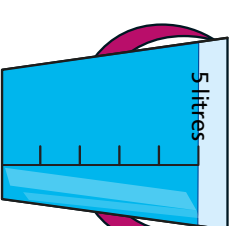
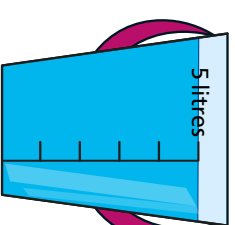
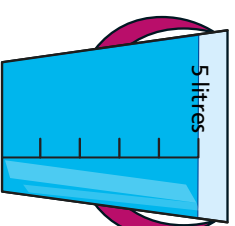
1 How much water is in each bucket?


 l

 l

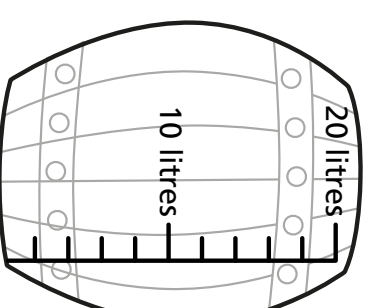
2 Each of these barrels holds 20 l.
How much water is in each barrel?


 l

 l

3 Tommy has 3 full buckets of water.



Each bucket contains 5 l of water.
Tommy pours all the water into the barrel.




Show where the water will reach in the barrel.

4 Milk is sold in 5 l and 2 l cartons.
How much milk is there altogether?


 l

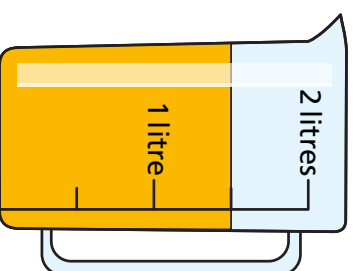




5 Tick the cartons to show 36 l of milk.




6 Eva fills a measuring jug with juice.

The jug holds 2 l when full.



Do you agree with Eva? _____
Explain your answer.

7 Kim puts 30 l of water into an empty fish tank.



Kim pours another 30 l into the same tank.
Draw a line on the tank to show where you
think the water will come to now.

8 How would you measure the capacity of
each object?

Tick litres or millilitres.

Object	Litres	Millilitres
bath		
mug		
spoon		
teapot		
swimming pool		

Talk about your answers.

