

Friday 5th February 2021

Happy Friday everyone!

Don't forget our zoom call at 11am today and to come dressed up in something that makes you YOU!

Remember to also send me in your PE scores for this week!

Mrs Hoddy

Subject Resources List

Handwriting:

- Whiteboard
- Whiteboard pen
- OR
- Pencil
- Exercise Book/Paper

Phonics:

- Whiteboard
- Whiteboard pen
- Pencil
- Exercise book

Maths:

- Pencil
- Paper or Exercise book
- Whiteboard and whiteboard pen
- Base 10 for tens and ones (e.g., Lego, pasta, pencils, buttons)
- 100 square

Art (den sculpture):

- Art materials to make a sculpture - you can use the salt dough recipe I have put in the task box or use other things in your home (e.g., play dough, cardboard boxes, clay etc.)

PE	<p>Remember to take part in the PE challenges for this week and don't forget to send me your scores (outlined in the document posted on ClassDojo).</p>
<p>Handwriting (10 minutes)</p>	<p>Can you practice the letter w?</p> <p>Don't forget you don't have to use a pencil and paper. You could use flour, playdough, rice and more!</p> <p>Try writing:</p> <p>w worm wiggled</p> <p>The worm wiggled.</p> <p>This video might help:</p>  <p>https://www.youtube.com/watch?v=5xKIFxVGlgg</p>
<p>Phonics Group 1 (20-30 minutes)</p>	<p>Today we are learning the 'ea' digraph. Watch the phonics fairy's video below:</p> <div style="display: flex; justify-content: space-around; align-items: center;">   </div> <p style="text-align: center;">ea, eat your peas</p> <p>Task: Use your phoneme fingers to sound out and blend (zip) these words.</p>

steamy- The 'y' is trying to trick you by making an /ee/ sound.



LI02416 - ea



LI02416 - ea



LI02416 - ea



LI02416 - ea



LI02416 - ea

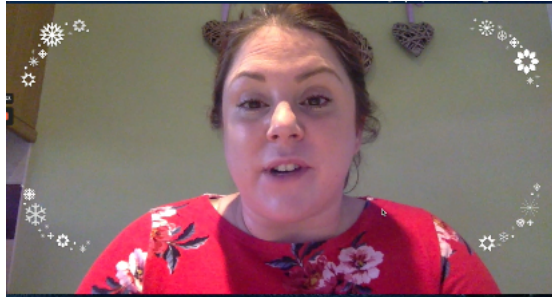


LI02416 - ea



Today we are learning the 'are' digraph. Watch
the teaching video below:

<https://www.loom.com/share/3772b27b45ab4f85b640c1015cd16784>




Task: If you can't print, just talk about which
match

'are' Word and Picture Matching

Match the picture to the correct word.




share



care



hare



scare



barefoot

Today in maths we are continuing to practice one more and one less.

Both **Task A** and **Task B** - Complete these questions:

1)

Use counters or cubes to make each number.

- a) one more than 21
- b) one more than 34
- c) one less than 41
- d) one less than 30

2)

Use different colours to show each number on the grid.

- a) one less than 17 c) one more than 39
- b) one more than 26 d) one less than 50

1	2	3	4	5	6	7	8	9	10
11	12	13	14	15	16	17	18	19	20
21	22	23	24	25	26	27	28	29	30
31	32	33	34	35	36	37	38	39	40
41	42	43	44	45	46	47	48	49	50

3)



My number has 4 tens. One more than my number would make the tens digit change.

Whitney



My number is one more than forty-five.

Dexter

Who has the greater number?

4)

Always, sometimes, never...



When you find one more than a number, only the ones digit will change.

Convince me using some examples.

Extension Question - choose a number from 20-50 and complete the grid.

Task A: complete at least 2 or extend to 3

Task B: complete all 4

Number	One more	One less
Sentence One more than _____ is _____. One less than _____ is _____.		Draw it (use Base 10)

Number	One more	One less
Sentence One more than _____ is _____. One less than _____ is _____.		Draw it (use Base 10)

	<table><tr><td>Number</td><td>One more</td><td>One less</td></tr><tr><td colspan="2">Sentence One more than _____ is _____. One less than _____ is _____.</td><td>Draw it (use Base 10)</td></tr></table> <table><tr><td>Number</td><td>One more</td><td>One less</td></tr><tr><td colspan="2">Sentence One more than _____ is _____. One less than _____ is _____.</td><td>Draw it (use Base 10)</td></tr></table>	Number	One more	One less	Sentence One more than _____ is _____. One less than _____ is _____.		Draw it (use Base 10)	Number	One more	One less	Sentence One more than _____ is _____. One less than _____ is _____.		Draw it (use Base 10)
Number	One more	One less											
Sentence One more than _____ is _____. One less than _____ is _____.		Draw it (use Base 10)											
Number	One more	One less											
Sentence One more than _____ is _____. One less than _____ is _____.		Draw it (use Base 10)											
Literacy (20-30 minutes)	<p>Use this time today to finish your story....</p> <p>Have you used some adjectives (describing words) to make your sentences more interesting?</p> <p>Do your sentences make sense?</p> <p>Have you used an exclamation mark?</p>												
Art (20-30 minutes)	<p>Sculpture of your den</p> <p>Task:</p> <p>Using the design of your den you built on Wednesday, your task today is to make a sculpture of it! You may want to make some salt dough to make your sculpture- here is a link to a recipe:</p> <p>https://www.bbcgoodfood.com/howto/guide/how-make-salt-dough-recipe</p> <p>However, you can use anything to make your den sculpture - from cutting and joining cardboard boxes to using playdough as a representation!</p>												

Yoga or
Dancing/Singing

Join in with this super fun and cool dance!!

PSHE KS1: Super Mood Movers - Fit and well

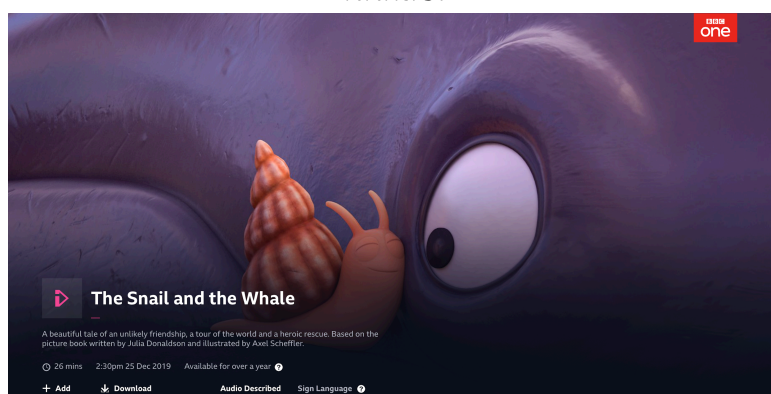
BBC Teach > Super Movers > Super Mood Movers



<https://www.bbc.co.uk/teach/supermovers/pshe-super-mood-movers-fit-and-well/zqr67yc>

Story time/
Dough Disco

Here's a Friday treat! Watch the Julia Donaldson story video 'The Snail and the Whale' if you would like!



<https://www.bbc.co.uk/iplayer/episode/m000cslw/the-snail-and-the-whale>